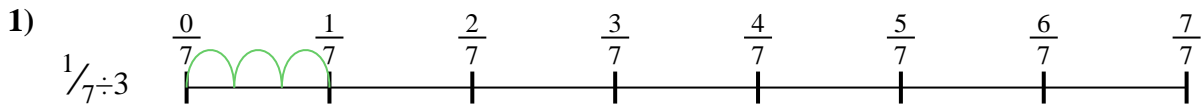




Use the numberline to solve each problem. The first is marked for you.


**Answers**



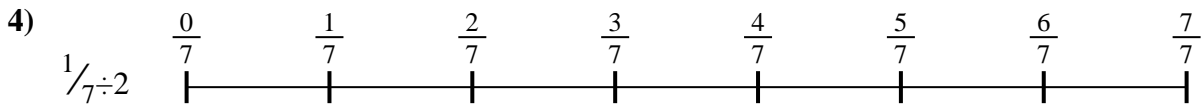
1. \_\_\_\_\_




2. \_\_\_\_\_




3. \_\_\_\_\_



4. \_\_\_\_\_



5. \_\_\_\_\_



6. \_\_\_\_\_



7. \_\_\_\_\_



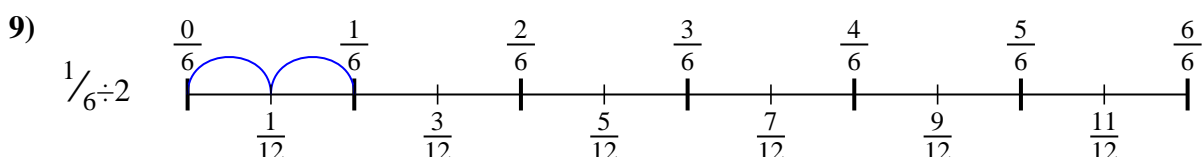
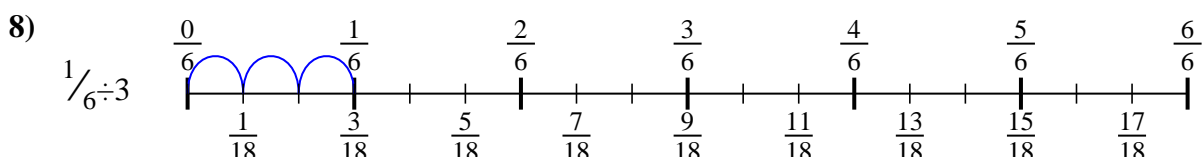
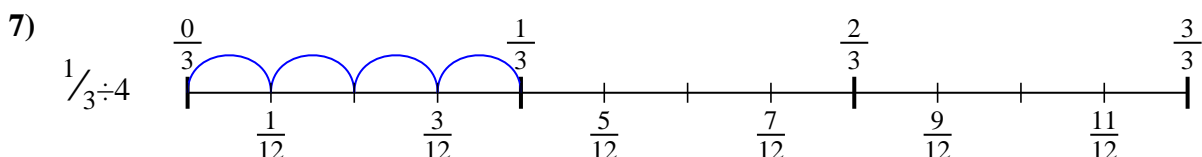
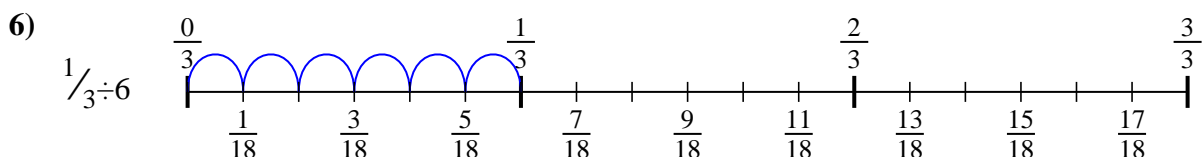
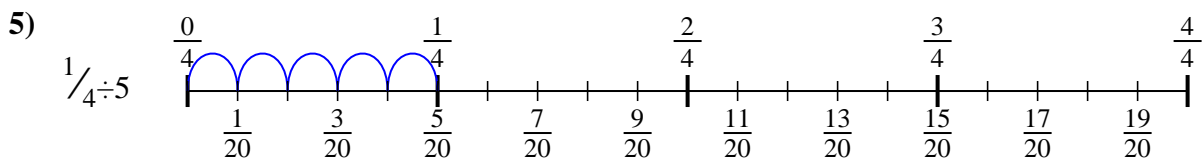
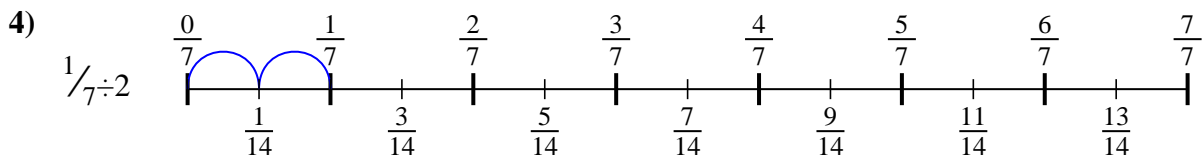
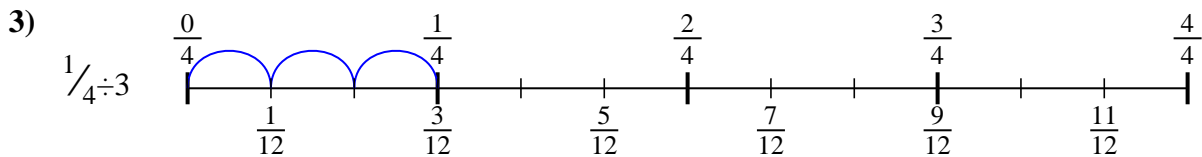
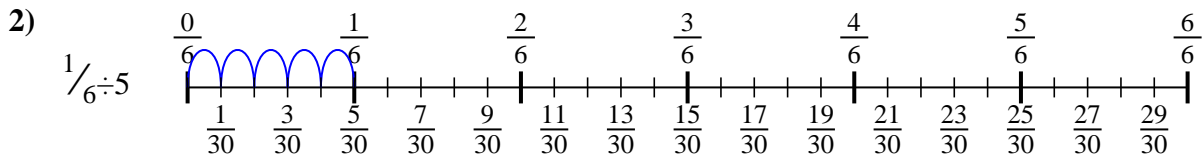
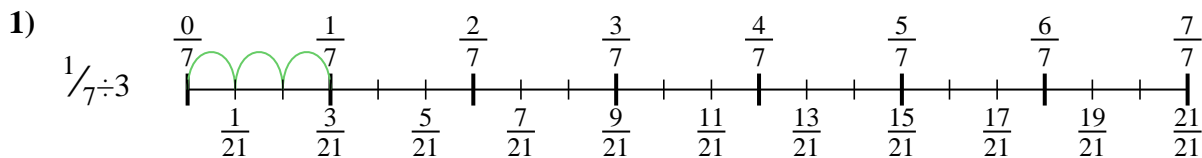
8. \_\_\_\_\_



9. \_\_\_\_\_



Use the numberline to solve each problem. The first is marked for you.



**Answers**

1.  $\frac{1}{21}$

2.  $\frac{1}{30}$

3.  $\frac{1}{12}$

4.  $\frac{1}{14}$

5.  $\frac{1}{20}$

6.  $\frac{1}{18}$

7.  $\frac{1}{12}$

8.  $\frac{1}{18}$

9.  $\frac{1}{12}$



Use the numberline to solve each problem. The first is marked for you.

**Answers**

$\frac{1}{30}$

$\frac{1}{12}$

$\frac{1}{12}$

$\frac{1}{20}$

$\frac{1}{21}$

$\frac{1}{18}$

$\frac{1}{18}$

$\frac{1}{12}$

$\frac{1}{14}$

1)

1. \_\_\_\_\_

2)

2. \_\_\_\_\_

3)

3. \_\_\_\_\_

4)

4. \_\_\_\_\_

5)

5. \_\_\_\_\_

6)

6. \_\_\_\_\_

7)

7. \_\_\_\_\_

8)

8. \_\_\_\_\_

9)

9. \_\_\_\_\_